



Klasse:

Name:


Datum:




$6 - 3 = \square$




$8 - 5 = \square$



$7 - 2 = \square$




$10 - 4 = \square$




$9 - 6 = \square$




$5 - 3 = \square$




$4 - 1 = \square$



$10 - 7 = \square$




$8 - 2 = \square$



$3 - 2 = \square$



$7 - 4 = \square$



$6 - 2 = \square$