



Klasse:

Name:


Datum:




$19 + \square = \square$




$12 + \square = \square$



$10 + \square = \square$



$9 + \square = \square$




$17 + \square = \square$




$5 + \square = \square$




$6 + \square = \square$



$13 + \square = \square$



$4 + \square = \square$



$14 + \square = \square$