





Klasse:

Name:


Datum:





$11 + \square = \square$




$3 + \square = \square$





$13 + \square = \square$





$9 + \square = \square$




$16 + \square = \square$





$10 + \square = \square$





$6 + \square = \square$



$5 + \square = \square$



$1 + \square = \square$



$19 + \square = \square$