
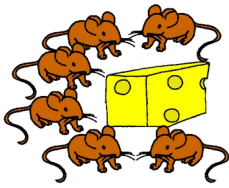




Klasse:

Name:



Datum:





$6 + 4 = \square$





$7 + 3 = \square$




$3 + 6 = \square$





$1 + 5 = \square$





$4 + 4 = \square$





$1 + 1 = \square$





$3 + 7 = \square$



$2 + 5 = \square$



$5 + 5 = \square$



$4 + 3 = \square$