


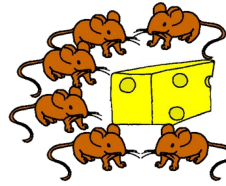
Klasse:

Name:



Datum:





$2 + 3 = \square$





$6 + 1 = \square$




$3 + 4 = \square$




$1 + 5 = \square$




$5 + 5 = \square$





$9 + 1 = \square$





$7 + 2 = \square$



$6 + 2 = \square$



$2 + 3 = \square$



$1 + 6 = \square$